

**Fractions Action!****Gameboard**

$\frac{2}{5}$	$\frac{4}{6}$	$\frac{2}{3}$	$1\frac{1}{5}$	$\frac{8}{3}$
$1\frac{2}{7}$	$\frac{5}{8}$	$2\frac{1}{5}$	$\frac{2}{6}$	$\frac{6}{8}$
$2\frac{1}{8}$	$1\frac{1}{4}$	<b>FREE</b>	$\frac{6}{15}$	$\frac{5}{6}$
$\frac{9}{7}$	$\frac{3}{4}$	$\frac{1}{6}$	$\frac{4}{10}$	$\frac{2}{12}$
$\frac{1}{3}$	$\frac{7}{8}$	$\frac{6}{9}$	$\frac{17}{8}$	$\frac{5}{4}$

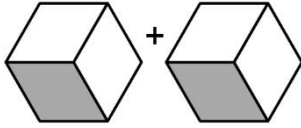
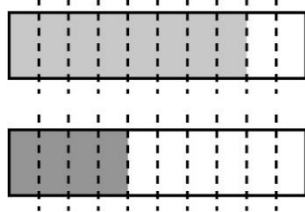

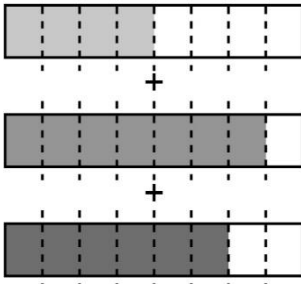
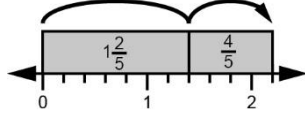
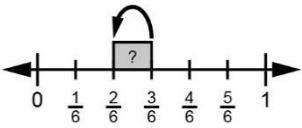
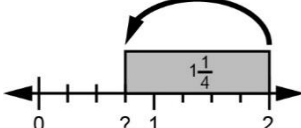
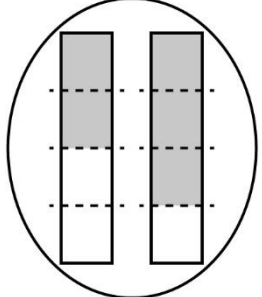
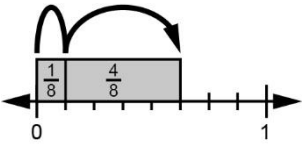
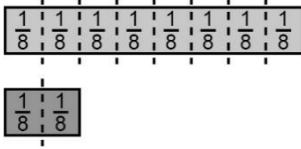
## Fractions Action! (cont'd)

### Game Cards

$\frac{3}{6} + \frac{2}{6}$	<p>Alexa mixes <math>\frac{2}{9}</math> of lemonade with <math>\frac{4}{9}</math> of water. How much liquid does she have altogether?</p>	$2\frac{2}{8} - 1\frac{3}{8}$
<p>Gerome has a full tray of brownies. He and his sister both ate <math>\frac{1}{6}</math> of the brownies. How much is left?</p>	$\frac{1}{5} + \frac{1}{5}$	<p>Aleshia needs <math>\frac{7}{5}</math> of soil and <math>\frac{4}{5}</math> of fertilizer for her garden. How much planting mixture will she have in total?</p>
$3 - \frac{7}{8}$	<p>For one recipe, Lenor needs 1 cup of flour. For another, she needs <math>\frac{2}{3}</math> of a cup of flour. What's the difference in flour needed?</p>	$\frac{2}{3} + \frac{2}{3} + \frac{2}{3} + \frac{2}{3}$
<p>Jabar walked <math>\frac{5}{7}</math> of a kilometre and then <math>\frac{4}{7}</math> of a kilometre to the library. How many kilometres did he walk altogether?</p>	$1\frac{3}{6} - \frac{7}{6}$	<p>Orange juice comes in 2 L-bottles. You use <math>\frac{3}{4}</math> L of juice for a smoothie. How much juice is left?</p>

# Fractions Action! (cont'd)

## Game Cards

<table border="1" style="margin: auto;"> <tr><td colspan="2">Whole</td></tr> <tr><td colspan="2" style="text-align: center;">?</td></tr> <tr><td>Part</td><td>Part</td></tr> <tr><td style="text-align: center;"><math>\frac{4}{7}</math></td><td style="text-align: center;"><math>\frac{5}{7}</math></td></tr> </table>	Whole		?		Part	Part	$\frac{4}{7}$	$\frac{5}{7}$		
Whole										
?										
Part	Part									
$\frac{4}{7}$	$\frac{5}{7}$									
										
										
		<table border="1" style="margin: auto;"> <tr><td colspan="2">Whole</td></tr> <tr><td colspan="2" style="text-align: center;"><math>1\frac{1}{9}</math></td></tr> <tr><td>Part</td><td>Part</td></tr> <tr><td style="text-align: center;"><math>\frac{4}{9}</math></td><td style="text-align: center;">?</td></tr> </table>	Whole		$1\frac{1}{9}$		Part	Part	$\frac{4}{9}$	?
Whole										
$1\frac{1}{9}$										
Part	Part									
$\frac{4}{9}$	?									



Name \_\_\_\_\_ Date \_\_\_\_\_

Number  
Unit 5 Line Master 4d

## ***Fractions Action!*** (cont'd) **Gameboard**

$\frac{1}{6}$	$\frac{2}{5}$	$\frac{6}{9}$
$\frac{2}{3}$	<b>FREE</b>	$\frac{2}{6}$
$\frac{1}{3}$	$\frac{4}{10}$	$\frac{5}{6}$