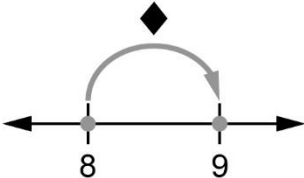

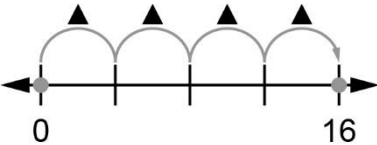
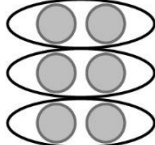

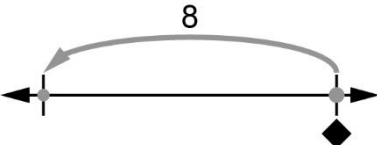


Patterning and Algebra
Unit 2 Line Master 1

Make a Match!

| Picture | Statement | Expression or Equation |
|---|--|------------------------|
|  | <p>8 plus a number is equal to 9</p> | |
|  | <p>2 times a number</p> | |
|  | <p>4 times a number is equal to 16</p> | |
|  | <p>6 divided by a number is equal to 2</p> | |
|  | <p>A number plus 3</p> | |
|  | <p>A number minus 8</p> | |