

Master 27a

# Metres or Centimetres?

## Length of Pen



We will use

**centimetres** or **metres**


We will use

**ruler** or **metre stick**

Our measure is

\_\_\_\_\_

## Length of Bulletin Board



We will use

**centimetres** or **metres**

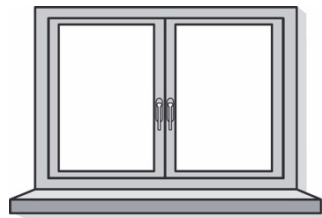
We will use

**ruler** or **metre stick**

Our measure is

\_\_\_\_\_

## Length of Window Ledge



We will use

**centimetres** or **metres**

We will use

**ruler** or **metre stick**

Our measure is

\_\_\_\_\_

## Glue Stick



We will use

**centimetres** or **metres**

We will use


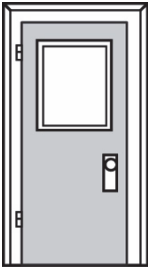


**ruler** or **metre stick**

Our measure is

\_\_\_\_\_

Master 27b

# Metres or Centimetres? (for Extension)

<p><b>Length of Your Shoe</b></p>  <p>We will use <b>centimetres</b> or <b>metres</b></p> <p>We will use <b>ruler</b> or <b>metre stick</b></p> <p>Our measure is _____</p>	<p><b>Height of Classroom Door</b></p>  <p>We will use <b>centimetres</b> or <b>metres</b></p> <p>We will use <b>ruler</b> or <b>metre stick</b></p> <p>Our measure is _____</p>
<p><b>Height of a Classmate</b></p>  <p>We will use <b>centimetres</b> or <b>metres</b></p> <p>We will use <b>ruler</b> or <b>metre stick</b></p> <p>Our measure is _____</p>	<p><b>Height of Lunch Bag</b></p>  <p>We will use <b>centimetres</b> or <b>metres</b></p> <p>We will use <b>ruler</b> or <b>metre stick</b></p> <p>Our measure is _____</p>

