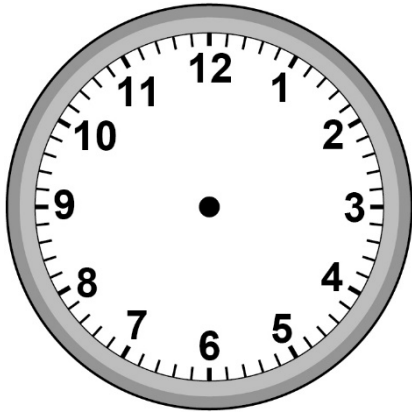
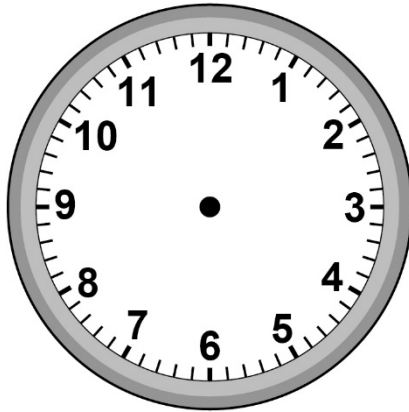


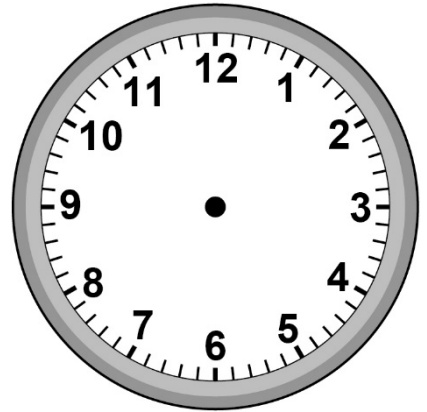
Les heures – Fiche d'activité B



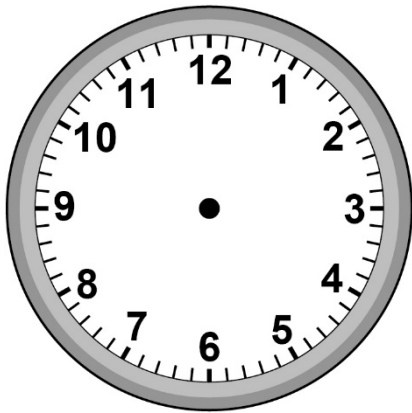
Quinze heures cinq



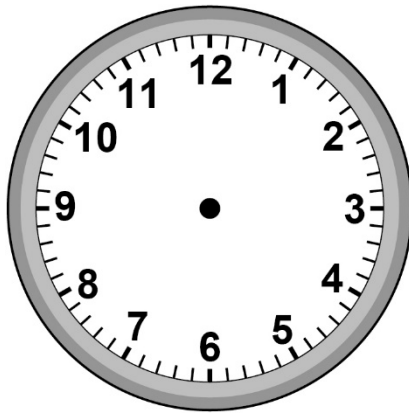
Quatre heures
trente-six



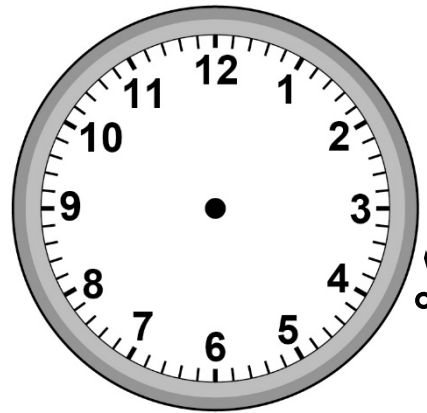
Minuit et demi



Treize heures
cinquante-deux



Sept heures quinze



Trois heures
trente-cinq

Fiche 4b

Tâche de temps B (suite)

Horloges numériques

a.m.
 p.m.

a.m.
 p.m.

a.m.
 p.m.

a.m.
 p.m.

a.m.
 p.m.

a.m.
 p.m.